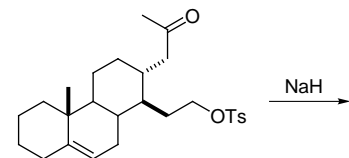
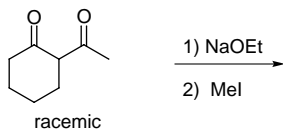
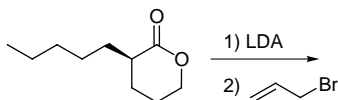
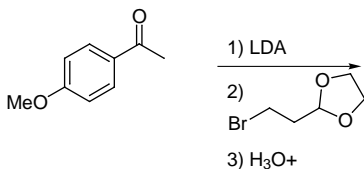
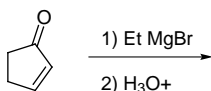
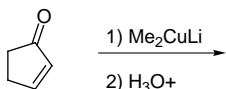
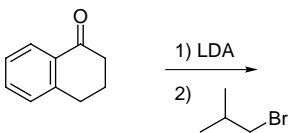
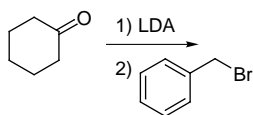


Chem 212
Enolate Problem Set

Provide the products for the following reactions. Provide the correct mechanism. Indicate whether the product(s) is(are) achiral, racemic or optically active.



5-membered rings form faster than 7-membered ones

