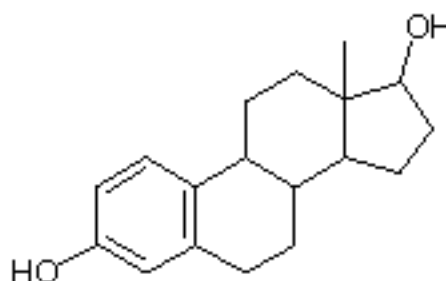
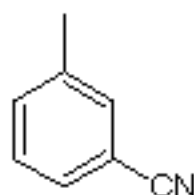
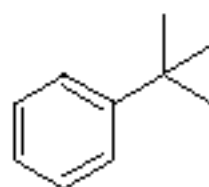
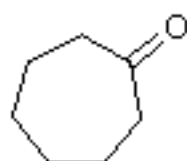
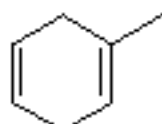
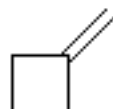
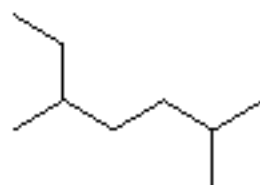
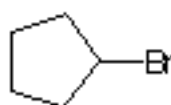


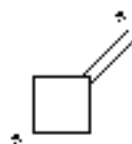
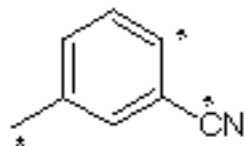
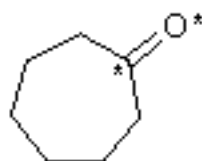
Problem Set

Organic Structures and Formulas

1. For each of the following structures, give a molecular formula.



2. For each structure given, identify the hybridization of the indicated atoms.



3. Draw line formulas for each of the following. Always count carbons to check your work.

